



SAMPLE

DIPLOMA EXAM

For information regarding this exam
contact:

The Exam Secretary

PO Box 16

Greenock

South Australia 5360

(08) 8562 8188

email: balsama@bigfoot.com.au

INSTRUCTION SHEET

This examination has **FOUR SECTIONS**. Please read the instructions carefully for each section.

If answering an oral question, the tape submitted must be a 60 minute tape of good quality and the recording must be clear and audible.

You must send in **2 COPIES** of all material submitted, including audio tapes, for each of the questions you undertake.

Please ensure you read the section **EXAM CRITERIA** which outlines the basic format and requirements.

You may undertake the Diploma Exam as either a Continuous Assessment Student or as an External Student.

Please ensure that you follow the instructions set out as varying conditions apply to each one

AS A CONTINUOUS ASSESMENT STUDENT

Prior to this examination you will have completed 4 assignments which will make up 25% of your final result. The marks you received for these assignments will have been submitted with your application together with a copy of ONE of the assignments.

You are given a **4 week period to complete the exam**.

You must undertake **3 QUESTIONS**:

- ☉ **ONE** from each of Sections 1 AND 2; and
- ☉ **ONE** from EITHER Section 3 or 4.

Place your student number on the top right hand corner of every item submitted including papers, tapes, charts, transit maps, etc.

No exam papers/materials will be returned to students so make a copy for your own records before you post it to the Exam Secretary.

ANSWER ONLY THREE QUESTIONS IN ALL.

TWO COPIES of your completed exam which consists of **3 Questions** in all should be returned to:

The Exam Secretary
PO Box 16
Greenock
South Australia 5360

THIS COMPLETED EXAM MUST BE POSTED MARKED NO LATER THAN 28 MAY 1999.

Any papers received after that date will not be marked.

AS AN EXTERNAL STUDENT

An external student is one who is:

- self-taught; or
- has studied with a non-Guild educator; or
- having studied with a Guild educator, chooses not to submit assignments and instead do the Diploma Exam as an external student.

You are given a **6 week period to complete the exam**.

You must undertake **5 QUESTIONS**:

- ☉ **ONE** from each of Sections 1, 2 and 3;
- ☉ **TWO** from Section 4.

Place your student number on the top right hand corner of every item submitted included papers, tapes, charts, transit maps, etc.

No exam papers/material will be returned to students so make a copy for your own records before you post it to the Exam Secretary.

ANSWER ONLY FIVE QUESTIONS IN ALL.

TWO COPIES of your completed exam which consists of **5 Questions** in all should be returned to:

The Exam Secretary
PO Box 16
Greenock
South Australia 5360

THIS COMPLETED EXAM MUST BE POSTED MARKED NO LATER THAN 11 JUNE 1999.

Any papers received after that date will not be marked.

EXAM CRITERIA

The Guild is looking for clarity of expression and sound astrological deduction as well as the ability to communicate this in a clear constructive manner to a client. Statements must be supported with astrological reasons.

In addition, make sure you answer the questions asked. Issues discussed which are not linked to the chart, do not address the question, or have no supporting astrological reasons, will receive no marks.

If you are quoting from another work, you must acknowledge the source in a standardised reference form and this must be followed consistently throughout.

Any attempt at plagiarism [*presenting someone else's work as your own*] will be penalised heavily.

PRESENTATION & FORMAT

Written Work

- ☞ If you are submitting hand written work, please ensure that it is legible and clear otherwise marks will be lost for bad presentation.
- ☞ If possible, work should be typed, using 12 point, non-italic font.
- ☞ Margins should be 1.5 cm all around, even if hand written.
- ☞ The use of margins and fonts should be consistent throughout the document.
- ☞ If word count exceeds or falls short of the limit by 30% or more, your work will be penalised.

Audio Tapes

- ☞ Audio tapes must be new, of good quality and 60 minutes in length (30,minutes on each side).
- ☞ The recording must be clear and audible. The Guild cannot take any responsibility for material submitted which is illegible, inaudible or in any way distorted.

- ☞ The written material which supports the audio tape must be clearly labelled and referred to in the audio presentation.
- ☞ Two identical copies of each tape as well as the supporting material must be submitted.
- ☞ All tapes and supporting material must be clearly labelled and in sequence.
- ☞ Keep the tape running and avoid multiple stops and starts.
- ☞ Do the tape in one sitting.
- ☞ Avoid reading your essay. This is a tape to a live person and continuity, clarity of thought and expression is important.

All exam material/papers must include the following:

- Student Number on every item;
- Cover sheet for every question answered outlining Section Number, Question Number and Student Number and the answer sheets/tape or other material attached to it securely;
- Bibliography

OTHER INFORMATION

Please also indicate which astrological programme (s) you are using to generate the data upon which your answers are based.

You may use any type of chart or 90° dial.

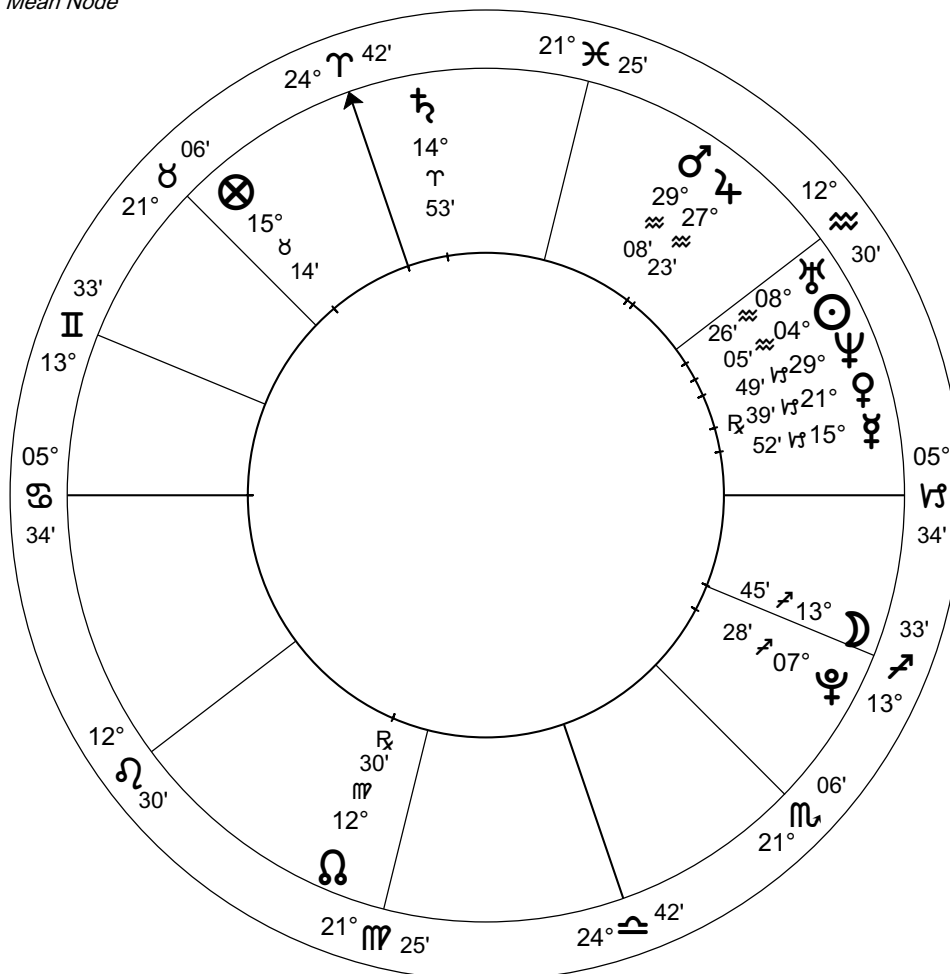
Section 1: Delineation

Answer only one question from this section

Question 1: This is a written question. (2500 words)

Barry's mother and father are clients of yours and they have asked you to look at their first child's chart. He is a healthy happy one year old. His parents are young professionals and he is their first child. They wish to gain insights into his general health, his education, his special skills or talents and any other point of which they need to be aware in order to help him reach his full potential.

Barry
Natal Chart
 24 Jan 1998
 6:13 PM AEDT -11:00
 Sydney NSW
 33S52 151E13
Geocentric
Tropical
Placidus
Mean Node



Section 1: Delineation

Answer only one question from this section

Question 2: This is an oral question. (60 minute tape)

The following is a letter you receive asking for a taped consultation. Please refer to the paperwork as you do the tape for the client.

February 1999

Dear Astrologer

I have taken up tertiary study and am in my 3rd year (part time) having always wanted to do so but circumstances have not been right before.

I am due to finish my degree at the end of 2001. My present employment has been limited to secretarial/receptionist duties and I am hoping to put my degree (Anthropology/Sociology) to use. Can you advise me what I should look for in positions for which I apply for that is, what questions I should be asking in order to ensure that the job is fulfilling for me.

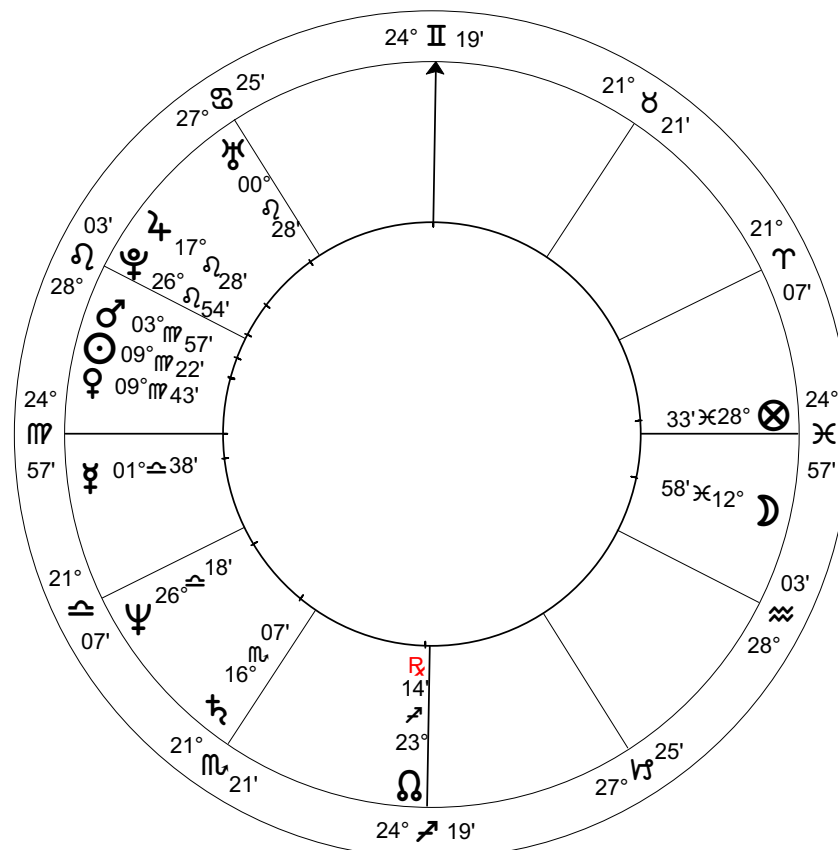
Also, will it be the right time to look for a job or should I do Honours in 2001?

Thank you

Margaret

Margaret

2 Sep 1955
7:01 AM PST +8:00
San Francisco CA
37N47 122W25



Section 2: Predictive

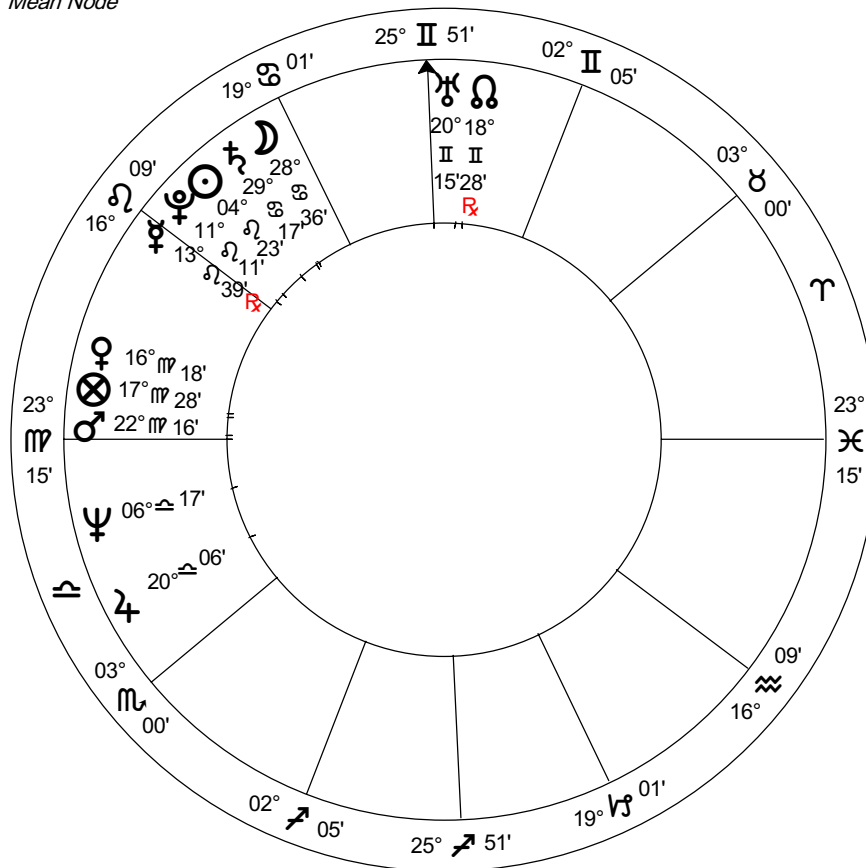
Answer only one question from this section

Question 1: This is a written question. (2500 words)

Malcom has been trying to make a career move from social worker to writer. He has been given some encouraging readers reports for his first novel and is considering giving up his paid work, in order to concentrate on his writing. He wishes to know if 1999 would be a good year in order to take this risk. He lives in Adelaide and is single.

Use any three (3) different methods of predictive astrology, making sure you synthesise these different techniques to look at 1999 for Malcom.

Malcom
Natal Chart
 28 Jul 1946
 9:38 AM AWST -8:00
 Perth WA
 31S57 115E51
Geocentric
Tropical
Placidus
Mean Node



Section 2: Predictive

Answer only one question from this section

Question 2: This is an oral question. (60 minute tape)

The following is a letter you receive asking for a taped consultation. Please refer to the paperwork as you do the tape for the client.

January 1999

Dear Astrologer

I am writing for some advice. After many years, I am at last about to get my day in court. In 1989, I suffered an accident at work and as a result of injuries suffered I could no longer do my job but because the cause was not diagnosed as being attributed to the injury I was sacked 2 years later. Since then, I have been pursuing the case as wrongful dismissal against my former employers. I have brought civil proceedings and it has taken all this time (after medical tests, postponements, statements, affidavits) to finally come before a judge.

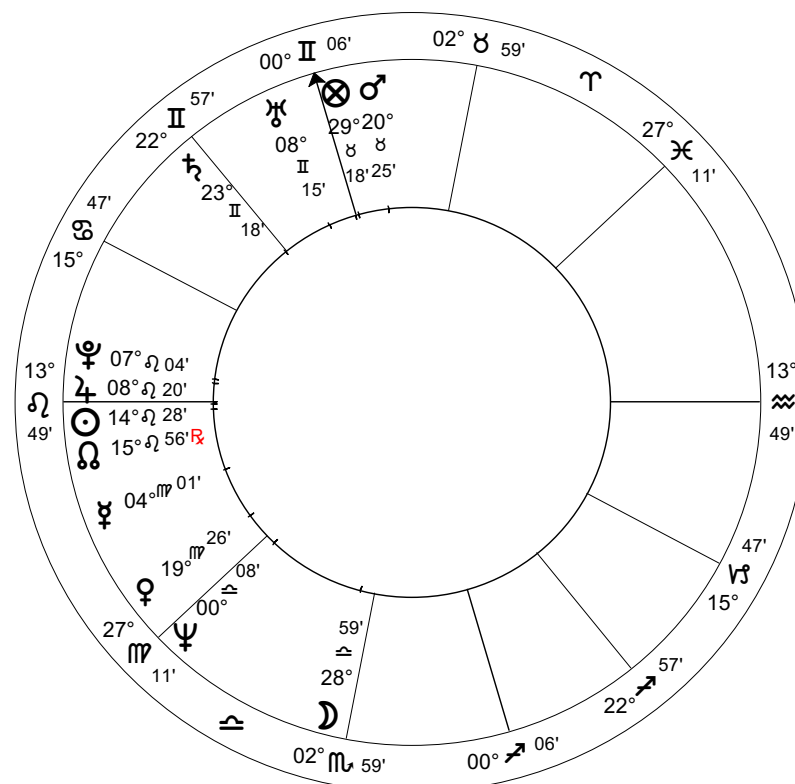
The case is due to be heard some time in 1999 and I wish to have some knowledge as to what this year holds for me and whether I should pursue this court case or walk away from the conflict?

Thank you

Leslie

Leslie

8 Aug 1943
6:45 AM AEST -10:00
Sydney NSW
33S55 151E10



Section 3: Relationships

Answer only one question from this section

Question 1: This is a written question. (2500 words)

Richard: 9 October 1951
7:30 pm (ACST -9:30)
Cowell, South Australia
33S41 136E55

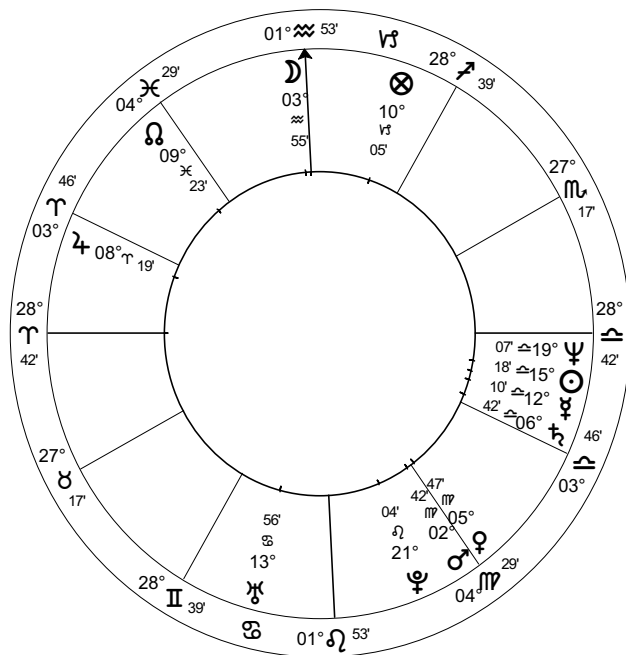
Denise: 6 June 1953
11:45 am (ACST -9:30)
Adelaide, South Australia
34S55 138E35

Richard and Denise have been living in Adelaide and in a relationship for the past ten years. They are employed in the same industry, but have always worked independently from one another. Recently they have been offered an opportunity to take up a partnership within the same firm and have come to you for advice on how to pursue a workable business partnership, whilst still maintaining a healthy personal relationship.

Draw up their Composite Chart and Synastry Grid and discuss how you would advise them on how to get the best from both their professional and private relationship. Discuss possible drawbacks or disadvantages they might also encounter within this new aspect of their relationship.

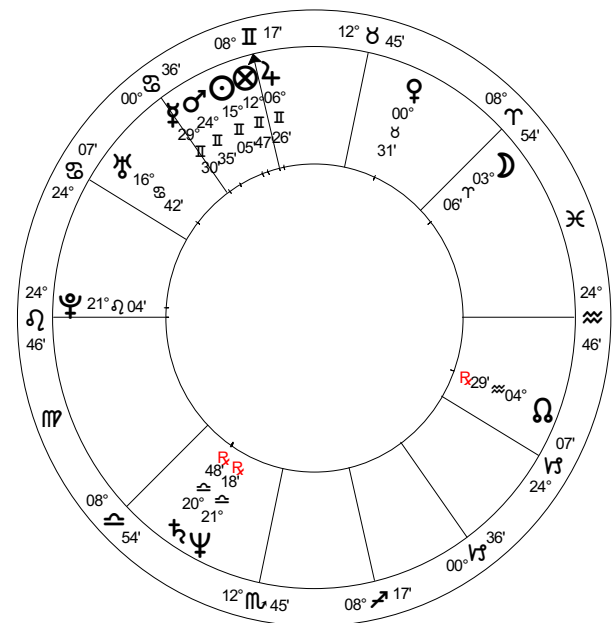
Richard

9 Oct 1951
7:30 PM ACST-9:30
Cowell SA
33S41 136E55



Denise

6 Jun 1953
11:45 AM ACST-9:30
Adelaide SA
34S55 138E35
Geocentric



Section 3: Relationships

Answer only one question from this section

Sarah: 18 January 1963
8:05 pm (GMT 0:00)
London, England
51N30 0W10

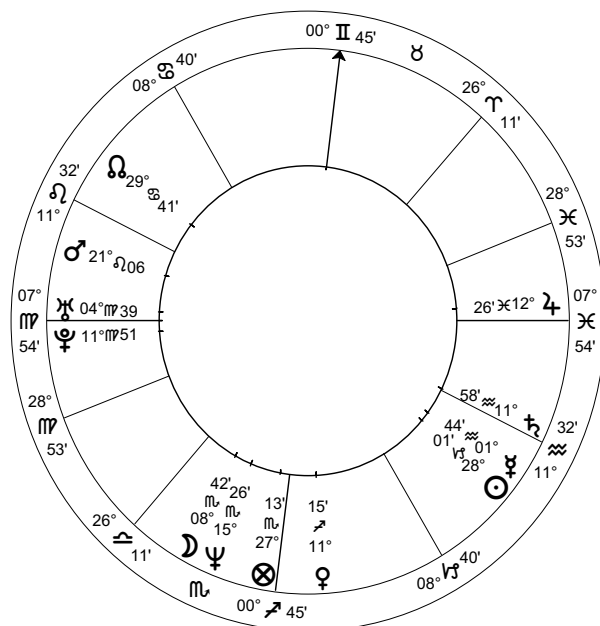
Michael: 5 August 1957
10:07 pm (ACST -9:30)
Adelaide, South Australia
34S55 138E35

Sarah and Michael are a married couple who are seeking your advice on their relationship. They are both in their late 30's and would very much like to become parents. Sarah has been on the IVF waiting list, in Adelaide, for the past three years and has recently been accepted into the program to commence within the next couple of months. They have spoken to other couples and they have been advised that the program places an enormous strain on a couple's relationship. Whilst understanding the generality of this statement, they would prefer to have more specific information about their own personal relationship. For this reason, they have come to seek your advice on how astrology may give them some insight into how this situation may affect them.

Using the tools of Composite Chart and Synastry Grid at your disposal, discuss the issues pertinent to their situation for 1999.

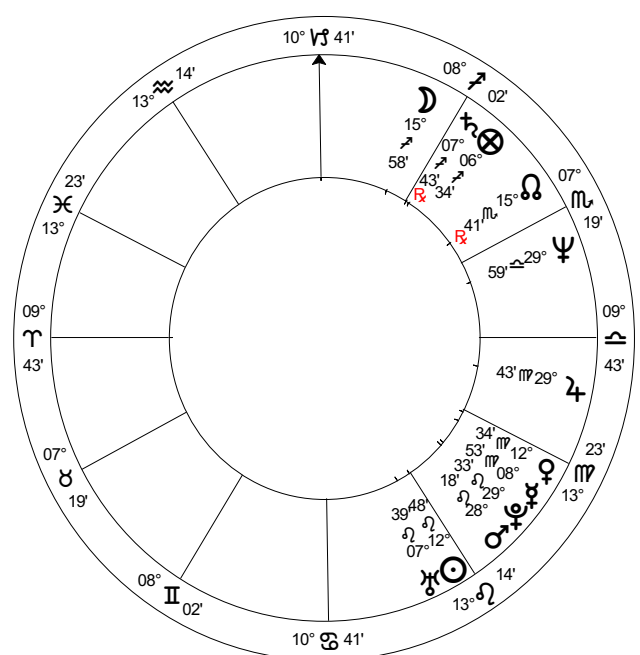
Sarah

18 Jan 1963
8:05 PM GMT+0:00
London, England
51N30 00W10



Michael

5 Aug 1957
10:07 PM ACST-9:30
Adelaide SA
34S55 138E35



Section 4

Select **ONE** of the following packages and answer **ALL** questions within that package:

PACKAGE ONE

Both questions are compulsory.

Using this chart:

Karl Marx

5th May, 1818

2:00 AM

Time Zone: LMT

Trier, Germany

49N45 6E38

Source : Clifford Data Compendium

QUESTION ONE

Using Astro*Carto*Graphy, look at Marx's chart and discuss why his work only began to find success when he moved to the UK.

(1000 words)

QUESTION TWO

Using Marx's 9th harmonic chart, discuss how it describes his philosophies and ideals. *(1000 words)*

BIOGRAPHY

Karl Marx was a German political philosopher and revolutionist and co-founder with Friedrich Engels of scientific socialism (modern communism). He was born in the city of Trier in the Rhine province of Prussia, now in Germany. He was the oldest surviving boy of nine children. His father, Heinrich, a successful lawyer, was a man of the Enlightenment, devoted to Kant and Voltaire, and who took part in agitations for a constitution in Prussia. His mother, Henrietta Pressburg, was from Holland. Both parents were Jewish and were descended from a long line of rabbis but a year or so before Karl was born, his father was baptised in the Evangelical Established Church, probably because his professional career required it. Karl was subsequently baptised when he was six years old. Although as a youth Karl was influenced less by religion than by the critical, sometimes radical social policies of the Enlightenment, his Jewish background exposed him to prejudice and discrimination that may have led him to question the role of religion in society and contributed to his desire for social change.

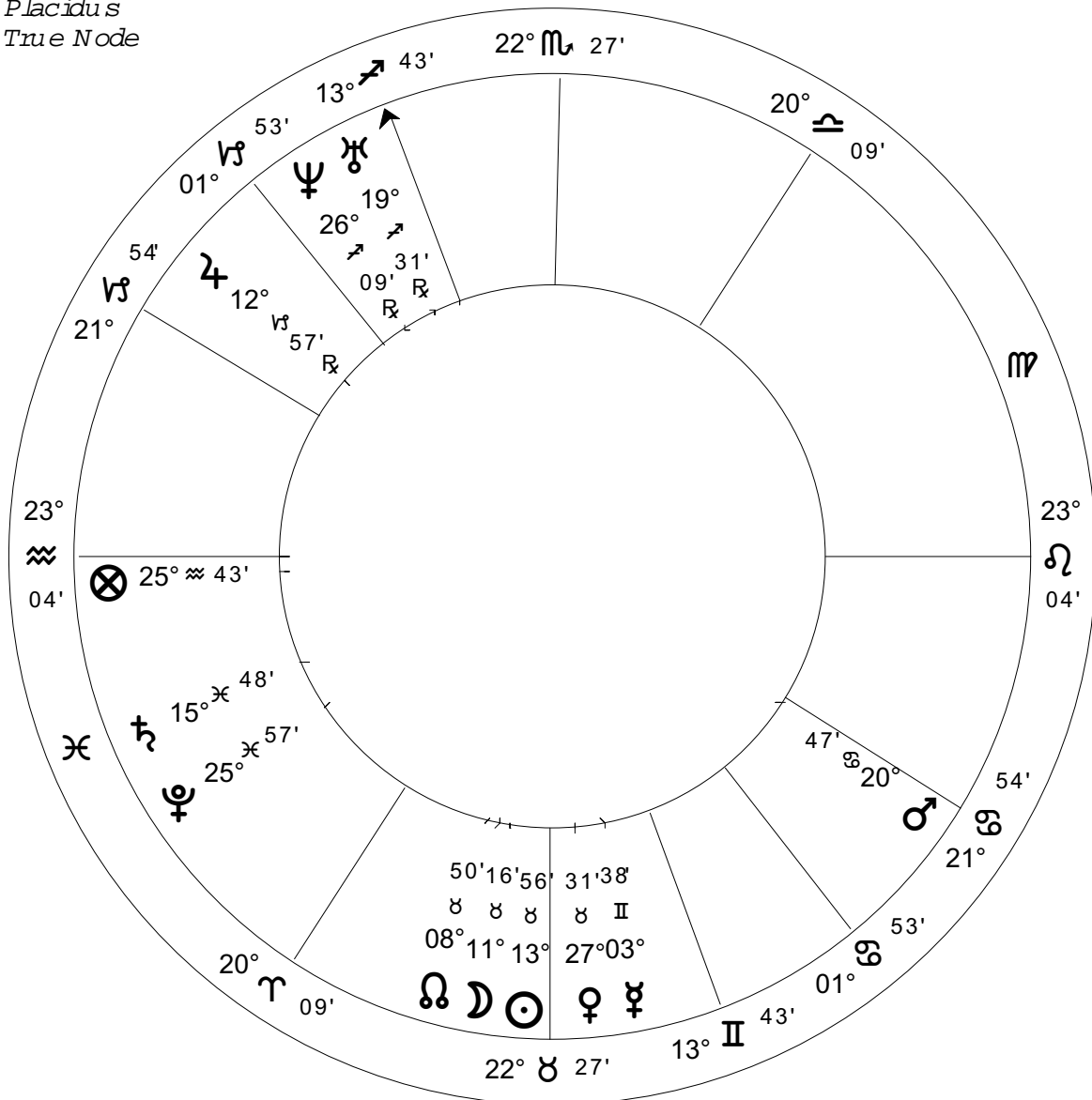
Key dates in his life include:

- 1836: goes to University of Berlin
- 1839: involved with Young Hegelians.
- 1842: contributes first article to newspaper and shortly becomes editor
- 1843: compelled to resign editorship and goes to Paris
- 1844: meets Engels and they collaborate on international working class movement
- 1845: ordered to leave Paris. Settles in Brussels
- 1847: Communist League established
- 1848: expelled from Brussels. Goes to Cologne
- 1849: arrested and expelled from Germany and later Paris. Settles in London.
- 1852: correspondent for The New York Times. Communist League dissolves
- 1864: First International established in London
- 1871: 'Das Kapital' published

Karl Marx

Natal Chart

5 May 1818
 2:00 AM -0:26:32
 Trier, Germany
 49N45 006E38
Geocentric
Tropical
Placidus
True Node



Section 4

Select **ONE** of the following packages and answer **ALL** questions within that package:

PACKAGE TWO:

Both questions are compulsory.

Using the following chart:

Charlie Chaplin

16th April, 1889

8:00 PM

Time Zone: UT

Walworth, London, UK

51N29 00W05

Source : Clifford Data Compendium

QUESTION ONE

Discuss the Progressed Sun in the chart of Charlie Chaplin and how it highlighted the different stages of his life. (1000 words)

QUESTION TWO

Using Chaplin's heliocentric chart, discuss his contribution to the art of film making. (1000 words).

BIOGRAPHY

Charlie Chaplin was born Charles Spencer Chaplin in London, England. His parents, Charles Chaplin, Sr and Hannah Hill were music hall entertainers but separated shortly after Charlie was born, leaving Hannah to provide for her children.

In 1896 when Hannah was no longer able to care for her children, Charlie and his brother Sydney were admitted to Lambeth Workhouse and later, Hanwell School for Orphans and Destitute Children.

Charlie had already debuted in the music hall in 1894, at the age of 5.

He was an actor, a mimic, a comedian and a composer. A pioneer of film, Chaplin's masterpiece "The Tramp" was released in April 1915. He was prolific as a storyteller and entertainer. City Lights (United Artists, 1931) and Modern Times (United Artists, 1936) are two examples of his great talents.

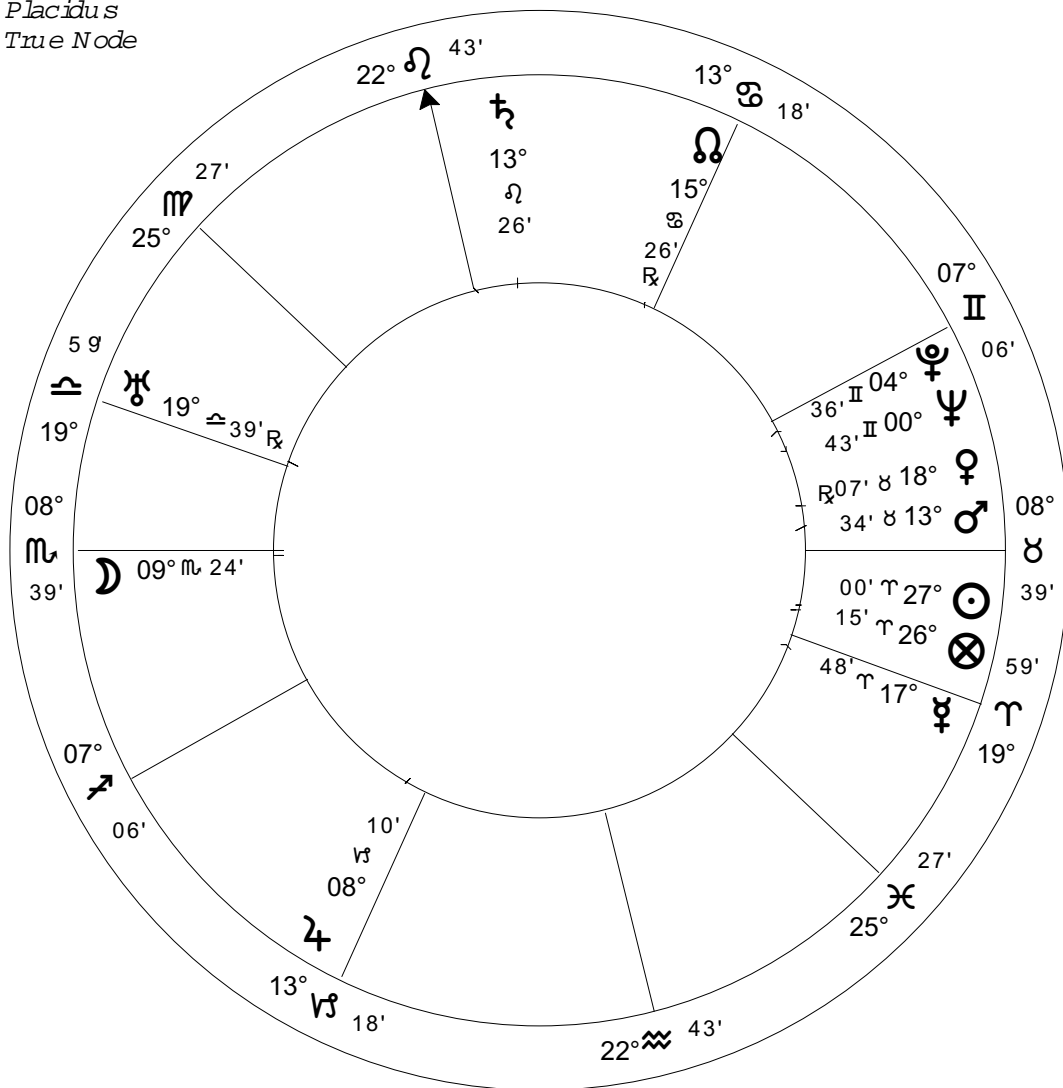
Both were extremely popular and it was clear from them that a well-made silent film could coexist with the talkies. Even when he was finally forced to acquiesce to the pressure of sound, the best moments in these later films are the silent ones. The Great Dictator (1940) was Chaplin's first full talking film.

Chaplin had an incredible business acumen. He carefully saved and preserved, as well as owned, his own pictures. Chaplin loved exposure and early in the game re-released many of his films to generations that followed. He never had a period of non-exposure.

Charles Chaplin

Natal Chart

16 Apr 1889
 8:00 PM UT +0:00
 Walworth, London
 51N29 00W 05
Geocentric
Tropical
Placidus
True Node



Section 4

Select **ONE** of the following packages and answer **ALL** questions within that package:

PACKAGE THREE:

Both questions are compulsory.

Using the following charts:

Elizabeth I, Queen of England
7 September 1533
3:00 pm LMT
Greenwich Palace
51N29 0W00

Victoria, Queen of England
24 May 1819
4:15 am LMT
London, UK
51N30 0W10

QUESTION ONE

The Fixed Star, *Facies*, rose as Elizabeth I's Moon was on the IC, *Sirius* culminated as her Venus rose and *Betelgeuse* culminated as her Sun rose.

Discuss the impact of these Fixed Stars on Elizabeth's life.

(1000 words)

QUESTION TWO

Queen Elizabeth I and Queen Victoria are two great monarchs who shaped the concept and culture of the United Kingdom. Compare and contrast the two charts.

(1000 words)

BACK GROUND INFORMATION

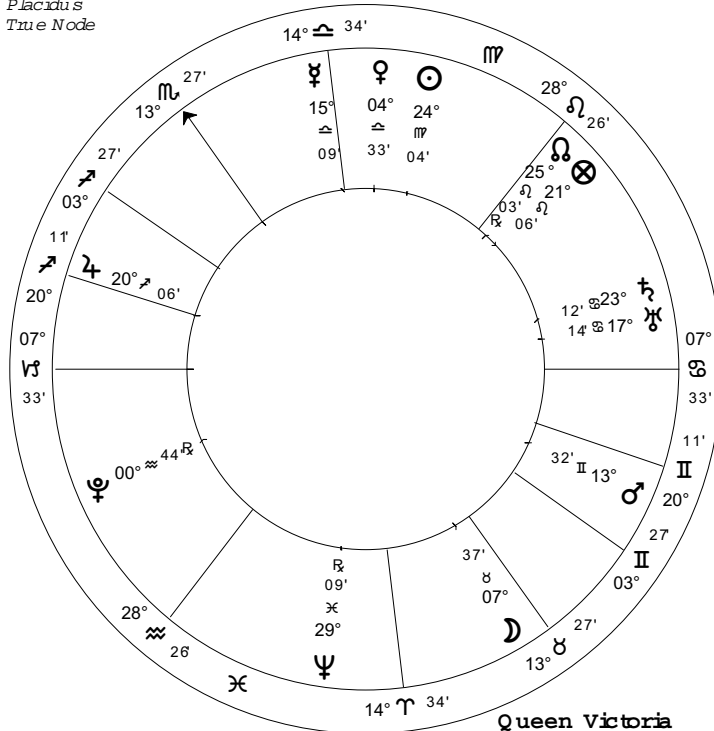
Queen Elizabeth I was known as "The Virgin Queen". Her father was King Henry VIII and her mother Anne Boleyn. She reigned from 1558 - 1603. In 1559, Elizabeth became head of the English Church.

In 1586, Elizabeth signed the Death Warrant of Mary, Queen of Scots at Greenwich. Elizabeth I died on 24th March 1603 of blood poisoning.

Queen Elizabeth 1

Natal Chart

7 Sep 1533
 3:00 PM LM T +0:00
 Greenwich
 51N30 00W 00
Geocentric
Tropical
Placidus
True Node



Queen Victoria

Natal Chart

24 May 1819
 4:15 AM LM T +0:00:40
 London, England
 51N30 00W 10
Geocentric
Tropical
Placidus
True Node

